

THE UNITED REPUBLIC OF TANZANIA
NATIONAL EXAMINATIONS COUNCIL
CERTIFICATE OF SECONDARY EDUCATION EXAMINATION

161/02

FINE ARTS 2

(For Schools Candidates Only)

Time: 3 Hours

ANSWERS

Year: 2021

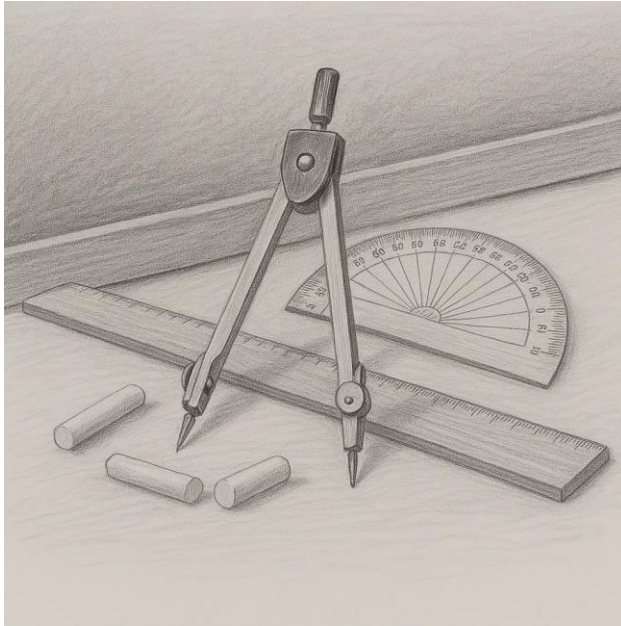
Instructions

1. This paper consists of FOUR questions.
2. Answer all questions in section A and B and two questions from section C.


maktaba.tetea.org



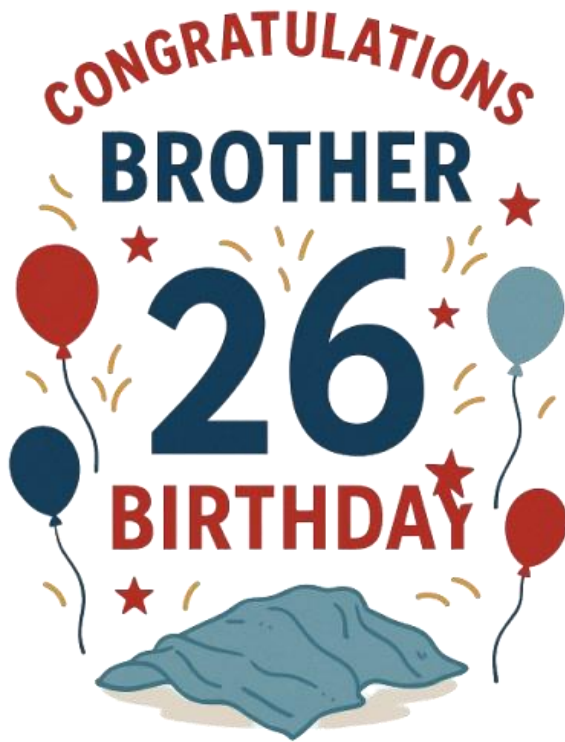
1. Make a drawing of teacher's tools (a blackboard ruler, a protractor, a compass and pieces of chalk) arranged on the table.



2. Make a detailed drawing of arranged stones by indicating tool with smooth surface and the one with a rough surface.



3. Make a design of a greeting card congratulating your brother for his 26 birthday celebration.



4. Using the square method design cost for Samaritan international academy using three colors.

