

Candidate's Number _____

School's Name _____

Region _____

District _____

**THE UNITED REPUBLIC OF TANZANIA
NATIONAL EXAMINATIONS COUNCIL OF TANZANIA
A SAMPLE OF PRIMARY SCHOOL LEAVING EXAMINATION**

04E

MATHEMATICS

Time: 2:00 Hours

Year: 2024

Instructions

1. This paper consists of sections A, B and C with a total of **eight (8)** questions.
2. Answer **all** questions.
3. Show clearly all workings on the spaces provided besides each question.
4. All writings must be in **blue** or **black** pen, **except** drawings which must be in pencil.
5. Communication devices and any unauthorised materials are **not** allowed in the examination room.
6. Write your **Examination Number** and all other important information at the top right corner of every page.

FOR EXAMINER'S USE ONLY		
QUESTION NUMBER	SCORE	EXAMINER'S INITIALS
1		
2		
3		
4		
5		
6		
7		
8		
TOTAL		
CHECKER'S INITIALS		

Candidate's Number _____

School's Name _____

Region _____

District _____

SECTION A (10 Marks)

Answer **all** questions in this section.

For each of the following questions, work out the answer in the space provided showing all work clearly.

No.	Question	Working Answer and Space
1.	(a) $36,457 + 53,442 =$	
	(b) $9,878,784 - 4,768,670 =$	
	(c) $212 \times 25 =$	
	(d) $9\frac{1}{3} \div 4\frac{2}{3} =$	
	(e) $80,000 \div 50 =$	

Candidate's Number _____

School's Name _____

Region _____

District _____

No.	Question	Working Answer and Space
	(f) $50.025 - 25.997 =$	
	(g) $4\frac{1}{2} \times 5\frac{1}{3} =$	
	(h) $7\frac{1}{4} - 2\frac{1}{2} =$	

Candidate's Number _____

School's Name _____

Region _____

District _____

No.	Question	Working Answer and Space
	(i) $(-5) + (-8) =$	
	(j) $0.456 + 270.975 =$	

SECTION B (30 Marks)

Answer **all** questions in this section.

No.	Question	Working and Answer Space
2.	(a) Which digit has the place value of hundred thousands in the number 7,340,581?	

Candidate's Number _____

School's Name _____

Region _____

District _____

No.	Question	Working and Answer Space
	(b) What is the place value of the digit "6" in 764,293?	
	(c) The amount of Baraka's monthly wage is 3,560,518 shillings. Write the nearest thousands of that payment.	
	(d) Find the sum of the two missing numbers in the following sequence: 2, 4, 6, _____, _____.	
	(e) A Primary School has a total of 840 cattle of which $\frac{1}{6}$ are heifers. How many heifers are there?	

Candidate's Number _____

School's Name _____

Region _____

District _____

No.	Question	Working and Answer Space
	(f) What is the difference between 200,000 and 20,000?	
3.	(a) Jane, Asha, and Elia shared a fruit as follows: Jane received $\frac{1}{3}$ of the fruit, Asha received $\frac{4}{15}$ of the fruit and Elia received $\frac{2}{5}$ of the fruit. Arrange the fractions of the fruit in ascending order.	
	(b) The ages of Ethan, Lina, Abdallah, Natalia and Nadia are 3, 8, 15, 7 and 25 years respectively. Which of these children have ages that are prime numbers?	
	(c) Write the four next numbers in the following sequence: 50, 45, 40, _____, _____, _____, _____.	

Candidate's Number _____

School's Name _____

Region _____

District _____

No.	Question	Working and Answer Space
4.	(a) Elisha bought a radio at sh 25,000 and sold it at sh 20,000. What was the percentage loss?	
	(b) A grandmother started watering her garden at 7:30 a.m and completed after 40 minutes. At what time did she complete the work?	
	(c) How many hours are there in 5 days?	

Candidate's Number _____

School's Name _____

Region _____

District _____

No.	Question	Working and Answer Space
5.	(a) Find the difference between 15 grams 900 milligrams and 100 grams 100 milligrams.	
	(b) The length of a road is 45,000 metres. How long is the road in kilometres?	
	(c) An industry produces 22,400 kilograms of sugar per day. If the sugar is packed in 320 bags of equal weight, how many kilograms will each bag weigh?	

Candidate's Number _____

School's Name _____

Region _____

District _____

No.	Question	Working and Answer Space
6.	(a) A school has 465 pupils who are boys. If the number of boys is one third of all pupils, how many pupils are there in the school?	
	(b) If $a = 1$, $b = 2$ and $c = 3$, find the value of the expression $5a + 2b - c$.	
	(c) If $N = 3k - 1$, where k is an integer, find the value of the number N when $k = 300$.	

Candidate's Number _____

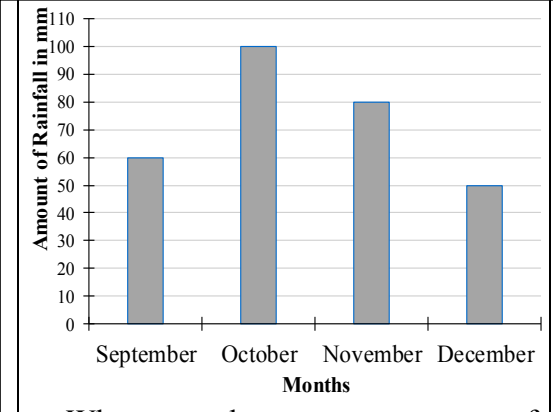
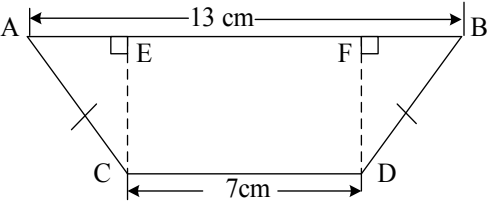
School's Name _____

Region _____

District _____

SECTION C (10 Marks)

Answer **all** questions in this section.

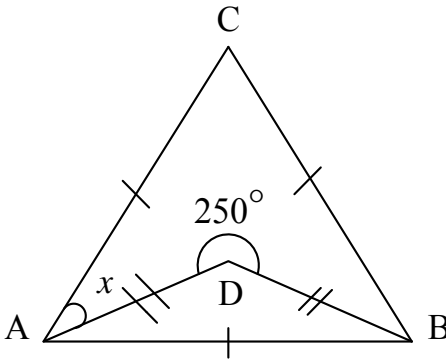
No.	Question	Working and Answer Space																				
7.	<p>(a) The following chart shows the amount of rainfall from September to December at Kyerwa district:</p>  <table border="1" data-bbox="221 632 774 1041"><thead><tr><th>Month</th><th>Amount of Rainfall (mm)</th></tr></thead><tbody><tr><td>September</td><td>60</td></tr><tr><td>October</td><td>100</td></tr><tr><td>November</td><td>80</td></tr><tr><td>December</td><td>50</td></tr></tbody></table> <p>What was the average amount of rainfall that rained in all months?</p> <p>(b) The following table shows Juhudi's height from the age of 8 to 13 years:</p> <table border="1" data-bbox="271 1255 757 1377"><tbody><tr><td>Age (Years)</td><td>8</td><td>10</td><td>12</td><td>13</td></tr><tr><td>Height (cm)</td><td>98</td><td>111</td><td>154</td><td>156</td></tr></tbody></table> <p>Between which ages the height was 1.3 metres?</p>	Month	Amount of Rainfall (mm)	September	60	October	100	November	80	December	50	Age (Years)	8	10	12	13	Height (cm)	98	111	154	156	
Month	Amount of Rainfall (mm)																					
September	60																					
October	100																					
November	80																					
December	50																					
Age (Years)	8	10	12	13																		
Height (cm)	98	111	154	156																		
8.	<p>(a) The following figure is a trapezium:</p>  <p>If its area is 80 cm^2, find the length of \overline{DF}.</p>																					

Candidate's Number _____

School's Name _____

Region _____

District _____

No.	Question	Working and Answer Space
	<p>(b) In the following figure, ABC is an equilateral triangle:</p>  <p>If $\overline{AD} = \overline{BD}$, what is the value of x?</p>	
	<p>(c) The diameter of a cylinder is 28 cm. If its height is 50 cm, what is its volume in cubic centimetres? (Use $\pi = \frac{22}{7}$)</p>	