

PUPIL'S NAME: \_\_\_\_\_

REGION: \_\_\_\_\_

COUNCIL: \_\_\_\_\_

**THE UNITED REPUBLIC OF TANZANIA**



**THE PRESIDENT'S OFFICE REGIONAL ADMINISTRATION AND LOCAL  
GOVERNMENTS**

**NUMERACY COMPTENCE ASSESSEMENT**

**STANDARD ONE**

**TIME: 1:30 HRS**

**DATE: \_\_\_\_\_ MAY 2023**

**SECTION: A**

**WRITE THE FOLLOWING IN FIGURE OR WORDS**

1. 36 = \_\_\_\_\_

2. 15 = \_\_\_\_\_

3. Sixty three = \_\_\_\_\_

4. Thirty one = \_\_\_\_\_

5. Fifteen = \_\_\_\_\_

PUPIL'S NAME: \_\_\_\_\_

REGION: \_\_\_\_\_

COUNCIL: \_\_\_\_\_

## SECTION: B

Write the missing number after

6. 10, 20, 30, 40, \_\_\_\_\_

7. 5, 6, 7, 8, \_\_\_\_\_

8.  $72 + \boxed{\phantom{00}} = 90$

## SECTION: C

**TAKE AWAY OR ADD THE FOLLOWING NUMBERS**

9.

$$\begin{array}{r} 8 \quad 9 \\ - 2 \quad 7 \\ \hline \end{array}$$

10.  $66 - 35 = \underline{\hspace{2cm}}$

11.

$$\begin{array}{r} 2 \quad 6 \\ + 3 \quad 1 \\ \hline \end{array}$$

12.  $65 + 34 =$

PUPIL'S NAME: \_\_\_\_\_

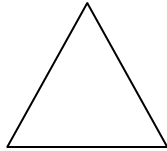
REGION: \_\_\_\_\_

COUNCIL: \_\_\_\_\_

## SECTION: D

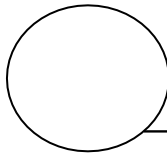
### MENTION NAME OF THE FOLLOWING SHAPES

13.




\_\_\_\_\_

14.



\_\_\_\_\_

15.



\_\_\_\_\_

16.



\_\_\_\_\_

## SECTION: E

Write this number in tens and ones

17. 72 tens \_\_\_\_\_ and ones \_\_\_\_\_

18. 57 tens \_\_\_\_\_ and ones \_\_\_\_\_

19. Tens 8 and ones 8 = \_\_\_\_\_

20. Tens 3 and ones 4 = \_\_\_\_\_