

**WIZARA YA ELIMU NA UTAMADUNI
MTIHANI WA TAIFA WA DARASA LA NNE
MWAKA 2005**

SOMO LA HISABATI

051

JINA LA MTAHINIWA:.....

JINA LA SHULE:.....

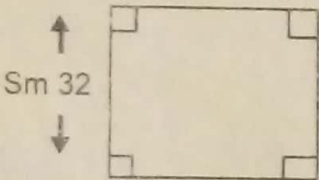
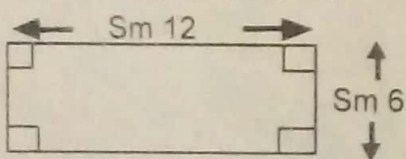
WILAYA:.....

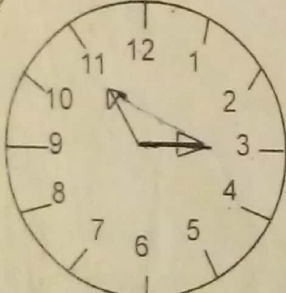
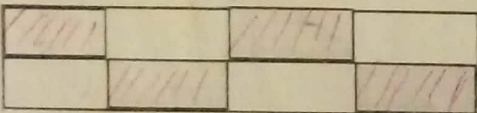

MKOA:.....

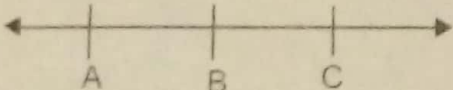
MUDA : SAA 1.00

MAELEKEZO:

1. Karatasi hii ina maswali 25.
2. Jibu maswali yote ishirini na tano (25) kama ilivyoelekezwa.
3. Majibu yote yaandikwe kwenye karatasi ya kujibia.
4. Kumbuka kuandika Jina lako, Shule, Wilaya na Mkoa.
5. Simu za mkononi haziruhusiwi kwenye chumba cha Mtihani.

S/Na.	SWALI	SEHEMU YA KAZI	JIBU
1.	6020 +516 =		
2.	5836 +625		
3.	6812 - 3765		
4.	3467 -1358		
5.	570 X12		
6.	12 $\overline{) 960}$		
7.	$\frac{8}{10} - \frac{5}{10}$		
8.	$\frac{3}{7} + \frac{1}{7} + \frac{2}{7} =$		
9.	Andika namba XIX kwa tarakimu za kawaida		
10.	Tafuta mzingo wa mraba ufuatao. 		
11.	Tafuta eneo la umbo hili 		
12.	Saa Dakika 12 16 -5 15		
13.	Shs Cts 309 70 65 65		

S/Na.	SWALI	SEHEMU YA KAZI	JIBU
14.	Andika kwa tarakimu "Elfu themanini na sita, mia tisa themanini na tisa"		
15.	Andika namba hii kwa maneno: 4835		
16.	Tafuta thamani ya "m" $\begin{array}{r} 7 \text{ m } 7 \text{ m} \\ + M \text{ } 5 \text{ } 6 \text{ } 9 \\ \hline 1 \text{ } 2 \text{ } 0 \text{ } m \text{ } 3 \end{array}$		
17.	Kilogramu $8\frac{1}{2}$ ni sawa na gramu ngapi?		
18.	Fatuma alinunua vitu vifuatavyo:- Sukari kg 4@sh.800/=, Maharagwe kg 3@sh. 600/=, Chumvi paketi 3@ 100/=, Unga kilo 5@ sh. 300/=, Sabuni vipande 4@ sh. 100/= Je jumla alitumia shilingi ngapi?		
19.	Mchoro wa Uso wa Saa unaonyesha saa ngapi? 		
20.	Sehemu gani ya Umbo iliyotiwa kivuli 		
	Soma grafu ya mahudhurio ya wanafunzi ifuatayo kisha jibu swali la 21 na 22. 		
21.	Je siku ipi mahudhurio yalikuwa hafifu sana		

S/Na	SWALI	SEHEMU YA KAZI	JIBU
	22. Wanafunzi waliohudhuria siku ya Jumatatu waliwazidi wale waliohudhuria ijumaa kwa kiasi gani?		
	23. Asha ana urefu wa Sm 175, John ana urefu wa Mita 1 Sm 50. Je, Asha anamzidi John kwa Sm ngapi?		
	24. Andika namba inayofuata katika mfululizo ufuatao - XXX, XXV, XX,		
	25.  Katika mchoro hapo juu vipo vipande vingapi vya mistari?		